



### MODULE – I

1. Prove with usual notations  $\tan\phi = r \frac{d\theta}{dr}$ .
2. Derive the expression  $p = r\sin\phi$  (Pedal Equation).
3. Prove that the following curve intersect orthogonally:
  - i.  $r^n = a^n \cos n\theta$  and  $r^n = b^n \sin n\theta$
  - ii.  $r = a(1 + \cos\theta)$  and  $r = b(1 - \cos\theta)$
  - iii.  $r = a(1 + \sin\theta)$  and  $r = a(1 - \sin\theta)$
4. Find the radius of curvature of the curve  $y^2 = \frac{a^2(a-x)}{x}$  at the point (a, 0).
5. Find the Pedal equation of the following curve
  - i.  $\frac{2a}{r} = 1 - \sin\theta$
  - ii.  $\frac{2a}{r} = 1 + \cos\theta$
  - iii.  $r^m = a^m(\cos m\theta + \sin m\theta)$
6. Find the radius of curvature of the curve  $x^3 + y^3 = 3axy$  at the point  $(3a/2, 3a/2)$ .
7. Find the radius of curvature of the cardioid  $r = a(1 + \cos\theta)$ .
8. Derive the radius of curvature in Cartesian form.
9. Derive the radius of curvature in Polar form.
10. Find the radius of curvature of the curve  $y = a \log \sec\left(\frac{x}{a}\right)$ .
11. Show that for the equiangular spiral  $r = ae^{\theta \cot\alpha}$  where a and  $\alpha$  are constants,  $\frac{\rho}{r}$  is constant.
12. Show that p for the curve  $r^n = a^n \cos n\theta$  varies inversely as  $r^{n-1}$ .
13. Show that for the curve  $r = a(1 + \cos\theta)$ ,  $\frac{\rho^2}{r}$  is a constant.
14. Find the angle between the following pairs of curves:
  - i.  $r = \sin\theta + \cos\theta$  and  $r = 2\sin\theta$ .
  - ii.  $r = a \log\theta$  and  $r = \frac{a}{\log\theta}$ .
  - iii.  $\frac{2a}{r} = 1 - \cos\theta$  at  $\theta = \frac{2\pi}{3}$ .



MODULE – II

- Using Maclaurin's series prove that  $\sqrt{1 + \sin 2x} = 1 + x - \frac{x^2}{2} - \frac{x^3}{6} + \frac{x^4}{24} + \dots$
- Using Maclaurin's series prove that  $\log(1 + e^x) = \log_e 2 + \frac{x}{2} + \frac{x^2}{8} - \frac{x^4}{192} + \dots$
- Expand  $e^{\sin x}$  as Maclaurin's series upto the terms containing  $x^4$ .
- Expand  $\log(1 + \sin x)$  as Maclaurin's series upto the terms containing  $x^4$ .
- Expand  $\log(\sec x)$  as Maclaurin's series upto the terms containing  $x^6$ .
- Evaluate (i)  $\lim_{x \rightarrow 0} (\cos x)^{\frac{1}{x^2}}$  (ii)  $\lim_{x \rightarrow \frac{\pi}{2}} (\tan x)^{\tan 2x}$
- Evaluate (i)  $\lim_{x \rightarrow 0} \left[ \frac{a^x + b^x c^x}{3} \right]^{\frac{1}{x}}$  (ii)  $\lim_{x \rightarrow \frac{\pi}{2}} (\sec x)^{\cot x}$
- If  $u = \frac{1}{\sqrt{x^2 + y^2 + z^2}}$  then show that  $\frac{\partial^2 u}{\partial x^2} + \frac{\partial^2 u}{\partial y^2} + \frac{\partial^2 u}{\partial z^2} = 0$
- If  $u = \log(x^3 + y^3 + z^3 - 3xyz)$  then prove that  $\frac{\partial u}{\partial x} + \frac{\partial u}{\partial y} + \frac{\partial u}{\partial z} = \frac{3}{x+y+z}$
- If  $u = e^{ax+by} f(ax - by)$ , prove that  $b \frac{\partial u}{\partial x} + a \frac{\partial u}{\partial y} = 2abu$
- If  $u = xy + yz + zx$  where  $x = \cos t, y = \sin t, z = t$  find  $\frac{\partial u}{\partial t}$  at  $t = \frac{\pi}{4}$
- If  $u = \log\left(\frac{x^2 + y^2}{x+y}\right)$  show that  $xu_x + yu_y = 1$
- If  $u = f\left(\frac{x}{y}, \frac{y}{z}, \frac{z}{x}\right)$ , then prove that  $x \frac{\partial u}{\partial x} + y \frac{\partial u}{\partial y} + z \frac{\partial u}{\partial z} = 0$
- If  $u = f(x - y, y - z, z - x)$ , then prove that  $x \frac{\partial u}{\partial x} + y \frac{\partial u}{\partial y} + z \frac{\partial u}{\partial z} = 0$
- If  $z = f(x, y)$  where  $x = r \cos \theta$  and  $y = r \sin \theta$  show that  $\left(\frac{\partial z}{\partial x}\right)^2 + \left(\frac{\partial z}{\partial y}\right)^2 = \left(\frac{\partial z}{\partial r}\right)^2 + \frac{1}{r^2} \left(\frac{\partial z}{\partial \theta}\right)^2$
- If  $u = f\left(\frac{y-x}{xy}, \frac{z-x}{xz}\right)$  Prove that  $x^2 u_x + y^2 u_y + z^2 u_z = 0$
- If  $u = f(2x - 3y, 3y - 4z, 4z - 2x)$ , Show that  $6u_x + 4u_y + 3u_z = 0$
- Find the total derivative of the following function and also verify the result by direct substitution method  $z = xy^2 + x^2y$  where  $x = at, y = 2at$
- If  $u = \frac{yz}{x}, v = \frac{zx}{y}, w = \frac{xy}{z}$ , show that  $\frac{\partial(u,v,w)}{\partial(x,y,z)} = 4$
- Find  $\frac{\partial(u,v,w)}{\partial(x,y,z)}$  where  $u = x^2 + y^2 + z^2, v = xy + yz + zx, w = x + y + z$
- If  $x = r \sin \theta \cos \phi, y = \sin \theta \sin \phi, z = r \cos \theta$  show that  $\frac{\partial(x,y,z)}{\partial(r,\theta,\phi)} = r^2 \sin \theta$ .
- If  $x + y + z = u, y + z = uv$  and  $z = uvw$ , then show that  $\frac{\partial(x,y,z)}{\partial(u,v,w)} = u^2 v$ .
- Find the extreme values of the function  $f(x, y) = x^3 + y^3 - 3x - 12y + 20$ .
- Find the maximum and minimum values of the function  $x^3 + 3xy^2 - 15x^2 - 15y^2 + 72x$ .
- Examine the function  $xy(a - x - y)$  for extreme values
- Examine the function  $\sin x + \sin y + \sin(x + y)$  for extreme values



### MODULE -3

1. Test the consistency and the find the solution.

I.  $x + y + z = 9$  ;  $x - 2y + 2z = 8$  ;  $2x + y - z = 3$

II.  $2x + y + z = 10$  ;  $3x + 2y + 3z = 18$  ;  $x + 4y + 9z = 16$

III.  $x_1 + x_2 + x_3 + x_4 = 2$  ;  $2x_1 - x_2 + 2x_3 - x_4 = -5$  ;

$3x_1 + 2x_2 + 3x_3 + 4x_4 = 7$  ;  $x_1 - 2x_2 - 3x_3 + 2x_4 = 5$

IV.  $x - y + z = 2$  ;  $3x - y + 2z = -6$  ;  $3x + y + z = -18$

V.  $x + y + z = -3$  ;  $3x + y - 2z = -2$  ;  $2x + 4y + 7z = 7$

2. Investigate the values of  $\lambda$  and  $\mu$  so that following system of equation possesses

(I) Unique (II) Infinitely many solution (III) No solution

I.  $2x + 3y + 5z = 9$  ;  $7x + 3y - 2z = 8$  ;  $2x + 3y + \lambda z = \mu$

II.  $x + y + z = 6$  ;  $x + 2y + 3z = 8$  ;  $x + 2y + \lambda z = \mu$

III.  $x + 2y + 3z = 6$  ;  $x + 3y + 5z = 9$  ;  $2x + 5y + \lambda z = \mu$

3. By using Gauss elimination method solve

I.  $2x + 20y - 2z + 44 = 0$  ;  $10x + 2y - z - 9 = 0$  ;  $-2x + 3y + 10z - 22 = 0$

II.  $x + y + z = 9$  ;  $x - 2y + 3z = 8$  ;  $2x + y - z = 3$

III.  $2x + y + 4z = 12$  ;  $4x + 11y - z = 33$  ;  $8x - 3y + 3z = 20$

IV.  $2x + y + z = 10$  ;  $3x + 2y + 3z = 18$  ;  $x + 4y + 9z = 16$

V.  $3x + 4y + 5z = 3$  ;  $2x - y + 8z = 13$  ;  $5x - 2y + 7z = 20$

4. Find the rank of the following matrices.

a)  $\begin{bmatrix} 2 & -1 & 1 \\ 3 & -1 & 1 \\ 4 & -1 & 2 \\ -1 & 1 & -1 \end{bmatrix}$

b)  $\begin{bmatrix} 4 & -1 & 3 & -1 \\ 2 & -1 & 0 & -1 \\ 1 & 0 & 2 & -1 \\ 1 & 0 & 2 & -2 \end{bmatrix}$

c)  $\begin{bmatrix} 2 & 5 & -4 & 6 \\ 1 & 2 & -2 & 2 \\ -1 & -3 & 2 & -2 \\ 2 & 4 & -1 & 6 \end{bmatrix}$

d)  $\begin{bmatrix} 0 & 1 & -3 & -1 \\ 1 & 0 & 1 & 1 \\ 3 & 1 & 0 & 2 \\ 1 & 1 & -2 & 0 \end{bmatrix}$

e)  $\begin{bmatrix} 2 & 3 & -1 & -1 \\ 1 & -1 & -2 & -4 \\ 3 & 1 & 3 & -2 \\ 6 & 3 & 0 & -7 \end{bmatrix}$

f)  $\begin{bmatrix} 1 & -2 & -1 & 3 \\ 2 & 5 & -4 & 7 \\ -1 & -2 & -1 & 2 \\ 3 & 3 & -5 & 10 \end{bmatrix}$



$$g) \begin{bmatrix} 4 & 0 & 2 & 1 \\ 2 & 1 & 3 & 4 \\ 2 & 3 & 4 & 7 \end{bmatrix}$$

$$h) \begin{bmatrix} 1 & 3 & 4 & 5 \\ 3 & 2 & 5 & 2 \\ 2 & -1 & 1 & -3 \end{bmatrix}$$

$$i) \begin{bmatrix} 1 & -3 & 1 & 2 \\ 0 & 1 & 2 & 3 \\ 3 & 4 & 1 & -2 \end{bmatrix}$$

$$j) \begin{bmatrix} 1 & 3 & 4 & 5 \\ 3 & 2 & 5 & 2 \\ 2 & -1 & 1 & -3 \end{bmatrix}$$

$$k) \begin{bmatrix} 1 & -1 & 3 & 6 \\ 1 & 3 & -3 & -4 \\ 1 & 2 & 3 & 11 \end{bmatrix}$$

$$l) \begin{bmatrix} 1 & 2 & 1 \\ 2 & 3 & 3 \\ 3 & 5 & 4 \\ 2 & 1 & 5 \end{bmatrix}$$

$$m) \begin{bmatrix} 6 & 1 & 3 & 8 \\ 4 & 2 & 6 & -1 \\ 10 & 3 & 9 & 7 \\ 16 & 4 & 12 & 15 \end{bmatrix}$$

$$n) \begin{bmatrix} -2 & -1 & -3 & -1 \\ 1 & 2 & 3 & 1 \\ 1 & 0 & 1 & 1 \\ 0 & 1 & 1 & 1 \end{bmatrix}$$

$$o) \begin{bmatrix} 3 & 2 & 1 & 4 \\ 1 & 4 & 3 & 2 \\ 4 & 6 & 4 & 6 \\ 7 & 8 & 5 & 10 \end{bmatrix}$$

$$p) \begin{bmatrix} 8 & 2 & 1 & 6 \\ 2 & 1 & 0 & 1 \\ 3 & 0 & 1 & 3 \\ 5 & 1 & 1 & 4 \end{bmatrix}$$

$$q) \begin{bmatrix} 1 & 2 & 2 & 4 \\ 2 & 3 & 4 & 6 \\ 3 & 5 & 6 & 10 \\ 4 & -1 & -3 & 2 \end{bmatrix}$$

ANSWERS: (48)

a) 3	b) 4	c) 4	d) 2	e) 3	f) 3
g) 3	h) 2	i) 3	j) 2	k) 3	l) 2
m) 2	n) 3	o) 2	p) 3	q) 3	

5. Find all Eigen value and corresponding Eigen vector for the following matrices

$$(i) \begin{bmatrix} 7 & -2 & 0 \\ -2 & 6 & -2 \\ 0 & -2 & 5 \end{bmatrix}$$

$$(ii) \begin{bmatrix} 1 & 1 & 3 \\ 1 & 5 & 1 \\ 3 & 1 & 1 \end{bmatrix}$$

$$(iii) \begin{bmatrix} -2 & 2 & 3 \\ 2 & 1 & -6 \\ -1 & -2 & 0 \end{bmatrix}$$

$$(iv) \begin{bmatrix} 8 & -6 & 2 \\ -6 & 7 & -4 \\ 2 & -4 & 3 \end{bmatrix}$$

6. By using Gauss Seidel method solve

I.  $10x + y + z = 12$  ;  $x + 10y + z = 12$  ;  $x + y + 10z = 12$

II.  $27x + 6y - z = 85$  ;  $6x + 15y + 2z = 72$  ;  $x + y + 54z = 110$



- III.  $20x + y - 2z = 17$  ;  $3x + 20y - z = -18$  ;  $2x - 3y + 20z = 25$   
IV.  $5x + 2y + z = 12$  ;  $x + 4y + 2z = 15$  ;  $x + 2y + 5z = 20$   
V.  $28x + 4y - z = 32$  ;  $2x + 17y + 4z = 35$  ;  $x + 3y + 10z = 24$

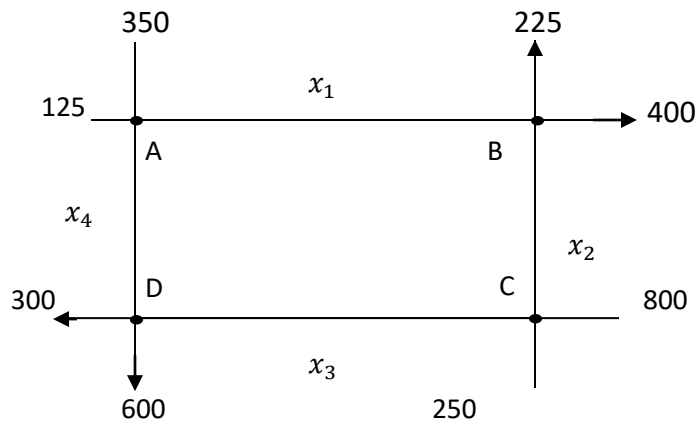
7. By the Rayleigh's power method solve

(ii)  $\begin{bmatrix} 2 & 0 & 1 \\ 0 & 2 & 0 \\ 1 & 0 & 1 \end{bmatrix}$       (ii)  $\begin{bmatrix} 6 & -2 & 2 \\ -2 & 3 & -1 \\ 2 & -1 & 3 \end{bmatrix}$

(iii)  $\begin{bmatrix} 25 & 1 & 2 \\ 1 & 3 & 0 \\ 2 & 0 & -4 \end{bmatrix}$       (iv)  $\begin{bmatrix} 4 & 1 & -1 \\ 2 & 3 & -1 \\ -2 & 1 & 5 \end{bmatrix}$

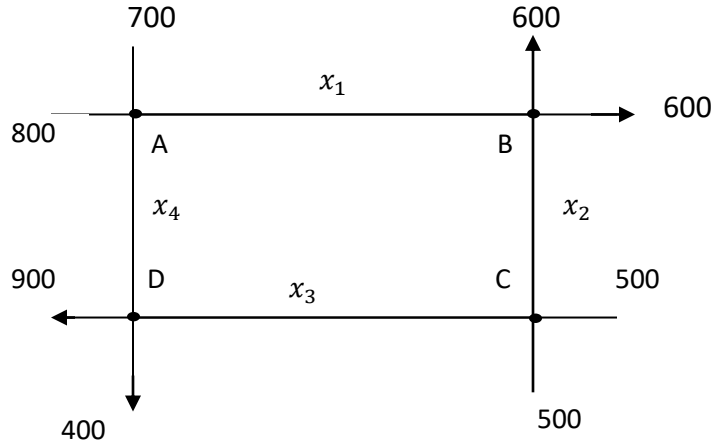
8. The flow of traffic through a network of streets is shown below:

- (i) Find  $x_1, x_2, x_3, x_4$  to balance the traffic flow.  
(ii) Find the traffic flow at  $x_4 = 0$   
(iii) Find the traffic flow at  $x_4 = 100$

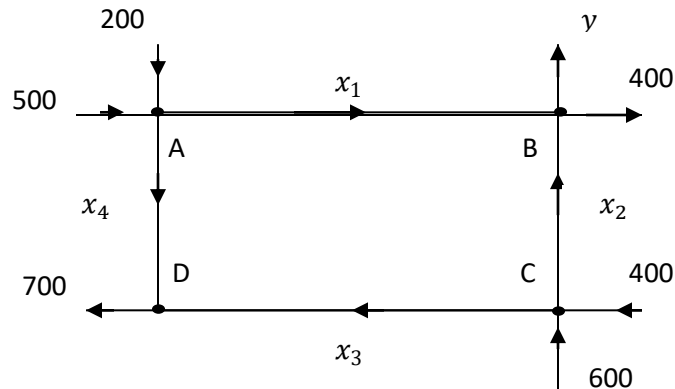




9. Balance the traffic flow at each intersection.



10. (i) What flow to the north should the traffic light at the intersection B let through to balance the traffic flow in this network?
- (ii) Assuming that the traffic light at B has been set to balance the total flow in and flow out, what should the flow be through the inner branches?





### MODULE -4

1. Solve the following Differential Equations

(i).  $y''' - 2y'' + 4y' - 8y = 0$

(ii).  $y''' + 6y'' + 11y' + 6y = 0$

(iii).  $\frac{d^3y}{dx^3} + y = 0$

(iv).  $(4D^4 - 4D^3 - 23D^2 + 12D + 36)y = 0$

(v).  $D^4 + 64)y = 0$

(vi).  $4\frac{d^4y}{dx^4} - 8\frac{d^3y}{dx^3} - 7\frac{d^2y}{dx^2} + 11\frac{dy}{dx} + 6 = 0$

2. Solve :

(i).  $y'' + 2y' + y = \cosh\left(\frac{x}{2}\right)$

(ii).  $6\frac{d^2y}{dx^2} + 17\frac{dy}{dx} + 12y = e^{-x}$

(iii).  $y'' - 4y' + 13y = \cos 2x$

(iv).  $(D^2 + 3D + 2)y = 4\cos^2 x$

(vi).  $y'' + 3y' + 2y = 12x^2$

(vii).  $y'' + y' + y = x^2 + x + 1$

(viii).  $(D^3 + D^2 + 4D + 4)y = x^2 - 4x - 6$

(ix).  $\frac{d^3y}{dx^3} + 4\frac{dy}{dx} = \sin 2x$

(x).  $(D^2 + 4)y = \sin^2 x$

3. Solve by the method of variation of parameters.

(i).  $y'' + y = x \sin x$

(ii).  $\frac{d^2y}{dx^2} + y = \tan x$

(iii).  $\frac{d^2y}{dx^2} + y = \sec x \tan x$

(iv).  $\frac{d^2y}{dx^2} + 4y = \sec^2 2x$

(v).  $\frac{d^2y}{dx^2} - 2\frac{dy}{dx} + 2y = e^x \tan x$

(vi).  $\frac{d^2y}{dx^2} + 4y = \tan 2x$

4. Solve the Cauchy's form of linear equation.

(i).  $x^2 \frac{d^2y}{dx^2} - 3x \frac{dy}{dx} + 4y = (1+x)^2$

(ii).  $x^2 \frac{d^2y}{dx^2} - 2x \frac{dy}{dx} - 4y = x^2 + 2 \log x$

(iii).  $x^2 \frac{d^3y}{dx^3} + 3x \frac{d^2y}{dx^2} + \frac{dy}{dx} = x^2 \log x$

(iv).  $x \frac{d^2y}{dx^2} - 2\frac{y}{x} = x^2 + \frac{1}{x^2}$



$$(v). x^3 \frac{d^3y}{dx^3} + 3x^2 \frac{d^2y}{dx^2} + x \frac{dy}{dx} + 8y = 65\cos(\log x)$$

5. Solve the Legendre's form of linear equation.

$$(i). (1+x)^2 \frac{d^2y}{dx^2} + (1+x) \frac{dy}{dx} + y = 2\sin[\log(1+x)]$$

$$(ii). (1+x)^2 \frac{d^2y}{dx^2} + (1+x) \frac{dy}{dx} + y = \sin 2[\log(1+x)]$$

$$(iii). (1+2x)^2 \frac{d^2y}{dx^2} - 6(1+2x) \frac{dy}{dx} + 16y = 8(2x+1)^2$$

$$(iv). (3x+2)^2 \frac{d^2y}{dx^2} + 3(3x+2) \frac{dy}{dx} - 36y = 8x^2 + 4x + 1$$

$$(v). (1+x)^2 \frac{d^2y}{dx^2} + (1+x) \frac{dy}{dx} + y = 4\cos[\log(1+x)]$$



## MODULE -5

1. Reducible to Exact differential equation :
  - (i). Solve  $(4xy + 3y^2 - x)dx + x(x + 2y)dy = 0$
  - (ii). Solve  $(x^2 + y^2 + xdx + xydy = 0$
  - (iii). Solve  $y(x + y)dx + (x + 2y - 1)dy = 0$
  - (iv). Solve  $(x^3 + y^3 + 6x)dx + y^2xdy = 0$
  - (v). Solve  $y(2x - y + 1)dx + x(3x - 4y + 3)dy = 0$
2. Reducible to Bernoulli's differential equation :
  - (i). Solve  $\frac{dy}{dx} + y \tan x = \sec x y^3$
  - (ii). Solve  $\frac{dy}{dx} + x \sin 2y = x^3 \cos^2 y$
  - (iii). Solve  $r \sin \theta - \cos \theta \frac{dr}{d\theta} = r^2$
  - (iv). Solve  $x \frac{dy}{dx} + y = x^3 y^6$
  - (v). Solve  $xy(1 + xy^2) \frac{dy}{dx} = 1$
3.
  - (i). Find the orthogonal trajectories of the family  $y^2 = cx^3$
  - (ii). Find the orthogonal trajectories of the family of a curve  $y^2 + 2xy - x^2 = c$
  - (iii). Find the orthogonal trajectories of the family of ellipse  $\frac{x^2}{a^2} + \frac{y^2}{a^2 + \lambda} = 1$
  - (iv). Find the orthogonal trajectories of the family  $r^n = a^n \cos n\theta$
  - (v). Find the orthogonal trajectories of the family  $\frac{2a}{r} = 1 - \cos \theta$
  - (iv). Find the orthogonal trajectories of the family  $r^n = a^n \sin n\theta$
4. A Bacterial culture growing exponentially increases from 100 to 400 grams in 10 hours . How much was present after 3 hours.
5. The number N of bacteria in a culture grew at a rate proportional to N. The value of N was initially 100 and increased to 332 in one hour. What was the value of N after 90 minutes.
6. In a certain chemical reaction the rate of conversion of a substance at time 't' is proportional to the quantity of the substance still untransformed at that instant at the end of one hour 60 grams remains and at the end of 4 hours 21 grams. How many grams of the first substance was there initially.



V V Sangha's  
ರಾವ್ ಬಹದ್ದೂರ್ ವೈ ಮಹಾಬಲೇಶ್ವರಪ್ಪ ತಾಂತ್ರಿಕ ಮಹಾ ವಿದ್ಯಾಲಯ, ಬಳ್ಳಾರಿ  
**Rao Bahadur Y Mahabaleshwarappa Engineering College, Ballari**  
**Department of Mathematics**

